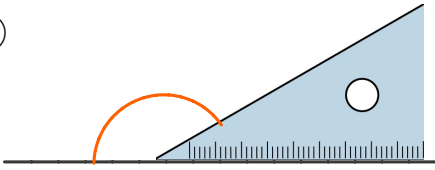


三角定規の計算

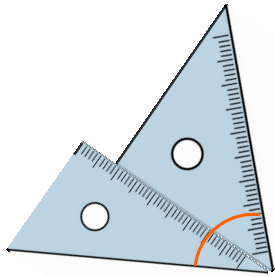
（ ）の角度を求めよ

①



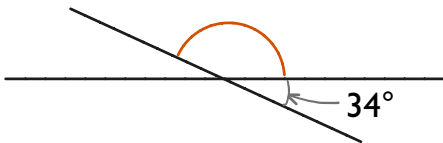
A _____

②



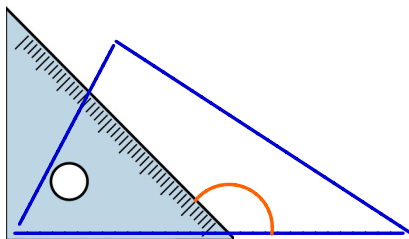
A _____

③



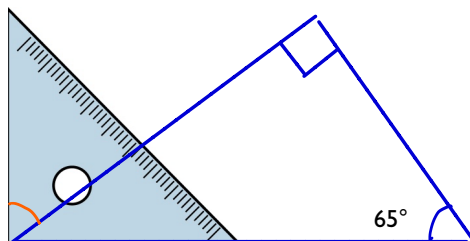
A _____

④



A _____

⑤



A _____

① $180-30=150^\circ$ ② $30+45=75^\circ$ ③ $180-34=146^\circ$ ④ $180-45=135^\circ$ ⑤ 65°